



Name_____ Surname_____ Class_____ No.____

Draw a line to match the number with the correct quantity of shapes.


1



2



3



4



5

